

¿Cuántos hay?

Cuenta los objetos y escribe
El número en el recuadro.

	<input type="text"/>
	<input type="text"/>
	<input type="text"/>
	<input type="text"/>
	<input type="text"/>
	<input type="text"/>

4	6	7	3	8	2	9	5
---	---	---	---	---	---	---	---

LA SUMA

Cuenta las figuras. Coloca la correcta suma en el recuadro.

	+		=	<input type="text"/>
--	---	--	---	----------------------

	+		=	<input type="text"/>
--	---	--	---	----------------------

	+		=	<input type="text"/>
--	---	--	---	----------------------

	+		=	<input type="text"/>
--	---	--	---	----------------------


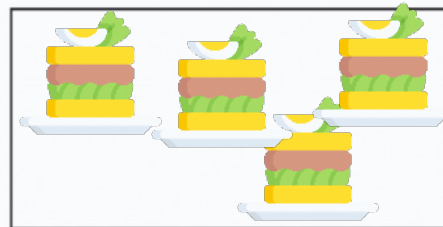
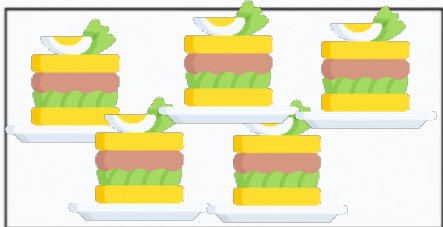



	+		=	<input type="text"/>
--	---	--	---	----------------------

- 2 5 4 3 7

COMPARA

Correcto ompara los grupos en cada fila y
escribe el símbolo correcto en el medio.


> = <




Cuenta y Colorea

Colorea las figuras basadas en el número que se indica


6




3




2




4



5



8



7

